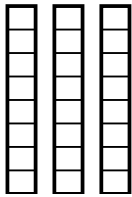


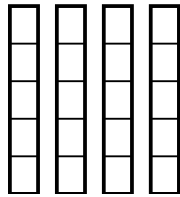


Use the visual models to solve.

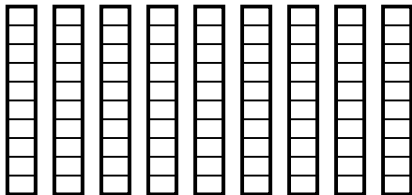
1) $\frac{5}{8} \times 3 =$



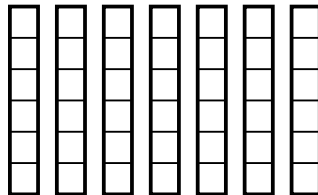
2) $\frac{1}{5} \times 4 =$



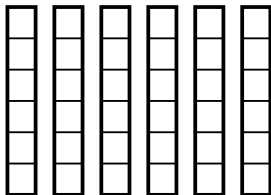
3) $\frac{8}{10} \times 9 =$



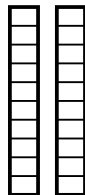
4) $\frac{3}{6} \times 7 =$



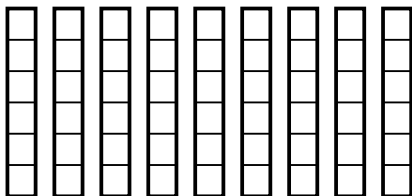
5) $\frac{5}{6} \times 6 =$



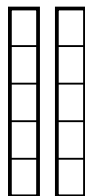
6) $\frac{8}{10} \times 2 =$



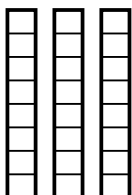
7) $\frac{1}{6} \times 9 =$



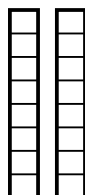
8) $\frac{1}{5} \times 2 =$



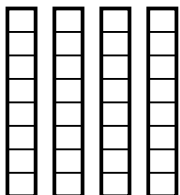
9) $\frac{1}{8} \times 3 =$



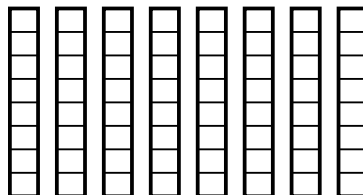
10) $\frac{4}{8} \times 2 =$



11) $\frac{2}{8} \times 4 =$



12) $\frac{6}{8} \times 8 =$



Answers

1. _____

2. _____

3. _____

4. _____

5. _____

6. _____

7. _____

8. _____

9. _____

10. _____

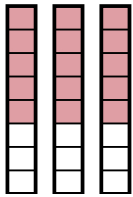
11. _____

12. _____

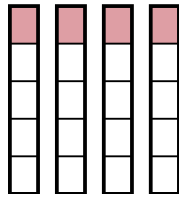


Use the visual models to solve.

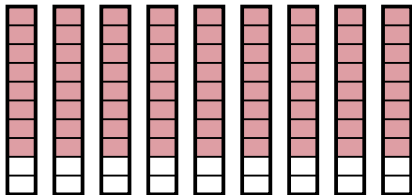
1) $\frac{5}{8} \times 3 =$



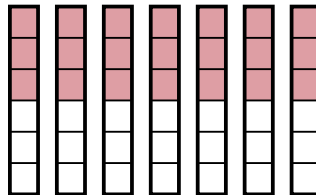
2) $\frac{1}{5} \times 4 =$



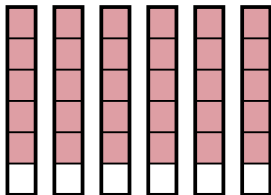
3) $\frac{8}{10} \times 9 =$



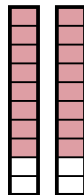
4) $\frac{3}{6} \times 7 =$



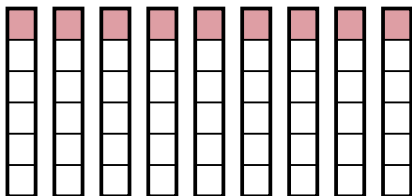
5) $\frac{5}{6} \times 6 =$



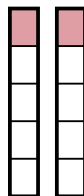
6) $\frac{8}{10} \times 2 =$



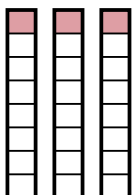
7) $\frac{1}{6} \times 9 =$



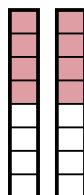
8) $\frac{1}{5} \times 2 =$



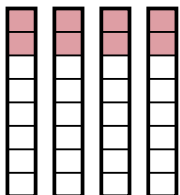
9) $\frac{1}{8} \times 3 =$



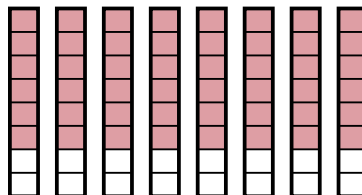
10) $\frac{4}{8} \times 2 =$



11) $\frac{2}{8} \times 4 =$



12) $\frac{6}{8} \times 8 =$



Answers

1. $\frac{15}{8}$

2. $\frac{4}{5}$

3. $\frac{72}{10}$

4. $\frac{21}{6}$

5. $\frac{30}{6}$

6. $\frac{16}{10}$

7. $\frac{9}{6}$

8. $\frac{2}{5}$

9. $\frac{3}{8}$

10. $\frac{8}{8}$

11. $\frac{8}{8}$

12. $\frac{48}{8}$